

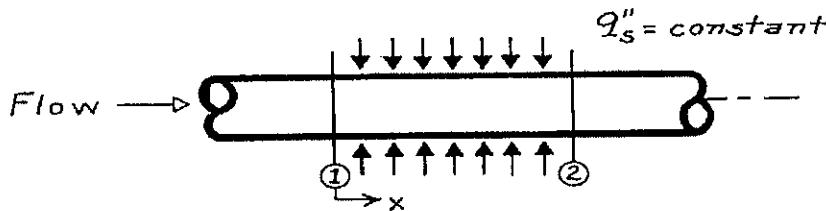
991 機械系博士班資格考試題目

考試科目	方式	
熱力熱傳學	Closed Book 可使用計算機	Part I

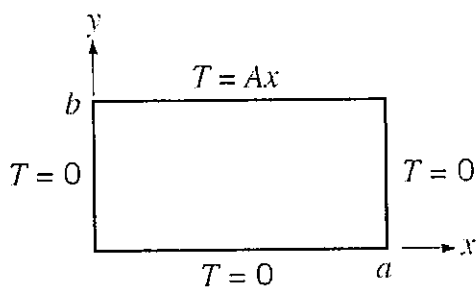
1. (20%) (a). Please describe the physical mechanisms of conduction, convection and radiation, and then also write their rate equations.
 (b). What is heat transfer defined ?
 (c) What is a thermal contact resistance ?, How is it defined in plane wall condition?
 (d) What is fin efficiency defined ?, What is its range of possible values ?

2. (15%) Consider flow in a circular tube. Within the test section length (between 1 and 2) a constant heat flux q''_s is maintained.

- (a). For the following two cases, sketch the surface temperature $T_s(x)$ and the fluid mean temperature $T_m(x)$ as a function of distance along the test section x . In case A flow is hydrodynamically and thermally fully developed. In case B flow is not developed.
 (b). Assuming that the surface flux q''_s and the inlet mean temperature $T_{m,1}$ are identical for both cases, will the exit mean temperature $T_{m,2}$ for case A be greater than, equal to or less than $T_{m,2}$ for case B ? Briefly explain why



3. (15%) A two-dimensional rectangular plate is subjected to the boundary conditions shown as below. Derive an expression for the steady state temperature distributions $T(x,y)$ with solving the heat conduction equation.



991 機械系博士班資格考試題目

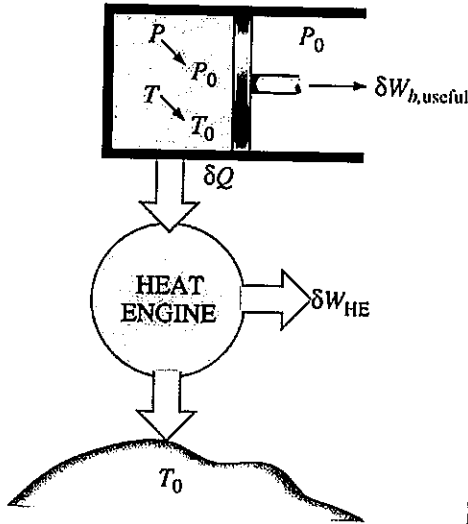
考試科目	方式	
熱力熱傳學	Closed Book 可使用計算機	Part II

1/2

1. 證明一密閉(closed system)系統之**火用**(exergy, X) (圖一) (15%)

$$X = Wc = (U - U_0) + p_0(V - V_0) - T_0(S - S_0) + KE + PE$$

Where U, V, S, KE and PE denote internal energy, volume, entropy, kinetic energy, and potential energy of the system at a specified state. U_0, V_0 and S_0 denote internal energy, volume, and entropy of the system at the dead state.



Energy Balance $\Delta U + \Delta KE + \Delta PE = Q - W; \Delta E = E_{in} - E_{out}$

2. 水在一加蓋的封閉容器(closed system)中置於爐上加熱，並以葉片攪拌。在整個加熱的過程中，傳入 30 kJ 的能量，但因熱傳至周圍空氣損耗 5 kJ 的熱能。葉片總作功 500N·m。若系統最初有 10kJ 的能量，求出系統最後的能量。(10%)

3. What are the air-standard assumptions? What is the compression ratio (r) (10%)

4. An ideal gas refrigeration cycle using air as the working fluid is to maintain a refrigerated space at -13°C (state 1) while rejecting heat to the surrounding at 27°C (state 3) as shown in Fig.2. The pressure ratio of the compressor is 4. Determine (a) the maximum and minimum temperatures in the cycle, (b) the coefficient of performance, and (c) the rate of refrigeration for a mass flow rate of 0.1 kg/s. (15%)

$$\left(\frac{P_2}{P_1}\right)_{s=\text{const}} = \frac{P_2}{P_1}$$

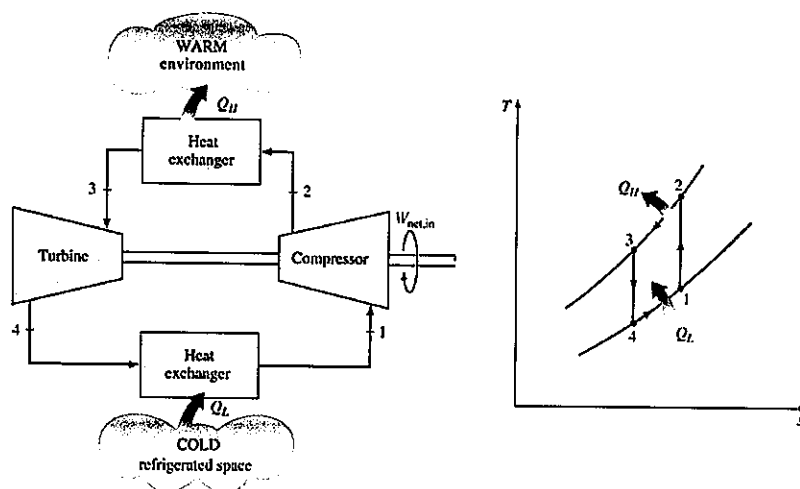


Fig.2

TABLE A-17

ideal-gas properties of air

T K	h kJ/kg	P_r	u kJ/kg	v_r	s° kJ/kg · K	T K	h kJ/kg	P_r	u kJ/kg	v_r	s° kJ/kg · K
200	199.97	0.3363	142.56	1707.0	1.29559	580	586.04	14.38	419.55	115.7	2.37348
210	209.97	0.3987	149.69	1512.0	1.34444	590	596.52	15.31	427.15	110.6	2.39140
220	219.97	0.4690	156.82	1346.0	1.39105	600	607.02	16.28	434.78	105.8	2.40902
230	230.02	0.5477	164.00	1205.0	1.43557	610	617.53	17.30	442.42	101.2	2.42644
240	240.02	0.6355	171.13	1084.0	1.47824	620	628.07	18.36	450.09	96.92	2.44356
250	250.05	0.7329	178.28	979.0	1.51917	630	638.63	19.84	457.78	92.84	2.46048
260	260.09	0.8405	185.45	887.8	1.55848	640	649.22	20.64	465.50	88.99	2.47716
270	270.11	0.9590	192.60	808.0	1.59634	650	659.84	21.86	473.25	85.34	2.49364
280	280.13	1.0889	199.75	738.0	1.63279	660	670.47	23.13	481.01	81.89	2.50985
285	285.14	1.1584	203.33	706.1	1.65055	670	681.14	24.46	488.81	78.61	2.52589
290	290.16	1.2311	206.91	676.1	1.66802	680	691.82	25.85	496.62	75.50	2.54175
295	295.17	1.3068	210.49	647.9	1.68515	690	702.52	27.29	504.45	72.56	2.55731
298	298.18	1.3543	212.64	631.9	1.69528	700	713.27	28.80	512.33	69.76	2.57277
300	300.19	1.3860	214.07	621.2	1.70203	710	724.04	30.38	520.23	67.07	2.58810
305	305.22	1.4686	217.67	596.0	1.71865	720	734.82	32.02	528.14	64.53	2.60319
310	310.24	1.5546	221.25	572.3	1.73498	730	745.62	33.72	536.07	62.13	2.61803
315	315.27	1.6442	224.85	549.8	1.75106	740	756.44	35.50	544.02	59.82	2.63280
320	320.29	1.7375	228.42	528.6	1.76690	750	767.29	37.35	551.99	57.63	2.64737
325	325.31	1.8345	232.02	508.4	1.78249	760	778.18	39.27	560.01	55.54	2.66176
330	330.34	1.9352	235.61	489.4	1.79783	780	800.03	43.35	576.12	51.64	2.69013
340	340.42	2.149	242.82	454.1	1.82790	800	821.95	47.75	592.30	48.08	2.71787
350	350.49	2.379	250.02	422.2	1.85708	820	843.98	52.59	608.59	44.84	2.74504
360	360.58	2.626	257.24	393.4	1.88543	840	866.08	57.60	624.95	41.85	2.77170
370	370.67	2.892	264.46	367.2	1.91313	860	888.27	63.09	641.40	39.12	2.79783
380	380.77	3.176	271.69	343.4	1.94001	880	910.56	68.98	657.95	36.61	2.82344
390	390.88	3.481	278.93	321.5	1.96633	900	932.93	75.29	674.58	34.31	2.84856
400	400.98	3.806	286.16	301.6	1.99194	920	955.38	82.05	691.28	32.18	2.87324
410	411.12	4.153	293.43	283.3	2.01699	940	977.92	89.28	708.08	30.22	2.89748
420	421.26	4.522	300.69	266.6	2.04142	960	1000.55	97.00	725.02	28.40	2.92128
430	431.43	4.915	307.99	251.1	2.06533	980	1023.25	105.2	741.98	26.73	2.94468
440	441.61	5.332	315.30	236.8	2.08870	1000	1046.04	114.0	758.94	25.17	2.96770
450	451.80	5.775	322.62	223.6	2.11161	1020	1068.89	123.4	776.10	23.72	2.99034
460	462.02	6.245	329.97	211.4	2.13407	1040	1091.85	133.3	793.36	23.29	3.01260
470	472.24	6.742	337.32	200.1	2.15604	1060	1114.86	143.9	810.62	21.14	3.03449
480	482.49	7.268	344.70	189.5	2.17760	1080	1137.89	155.2	827.88	19.98	3.05608
490	492.74	7.824	352.08	179.7	2.19876	1100	1161.07	167.1	845.33	18.896	3.07732
500	503.02	8.411	359.49	170.6	2.21952	1120	1184.28	179.7	862.79	17.886	3.09825
510	513.32	9.031	366.92	162.1	2.23993	1140	1207.57	193.1	880.35	16.946	3.11883
520	523.63	9.684	374.36	154.1	2.25997	1160	1230.92	207.2	897.91	16.064	3.13916
530	533.98	10.37	381.84	146.7	2.27967	1180	1254.34	222.2	915.57	15.241	3.15916
540	544.35	11.10	389.34	139.7	2.29906	1200	1277.79	238.0	933.33	14.470	3.17888
550	555.74	11.86	396.86	133.1	2.31809	1220	1301.31	254.7	951.09	13.747	3.19834
560	565.17	12.66	404.42	127.0	2.33685	1240	1324.93	272.3	968.95	13.069	3.21751
570	575.59	13.50	411.97	121.2	2.35531						